



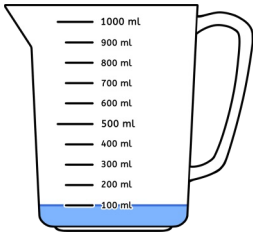
Name: \_\_\_\_\_

Datum: \_\_\_\_\_

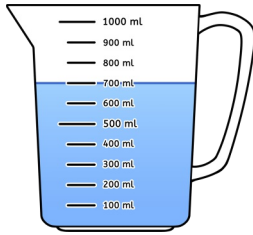
Klasse: \_\_\_\_\_

# Flüssigkeitsmengen

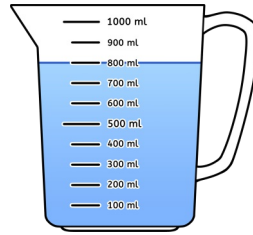
Wie viel Wasser ist im Messbecher? Lies richtig ab!



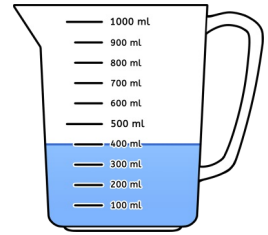
\_\_\_\_\_



\_\_\_\_\_

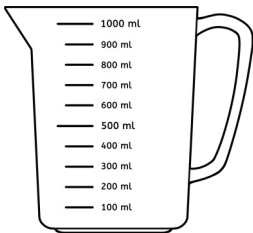


\_\_\_\_\_

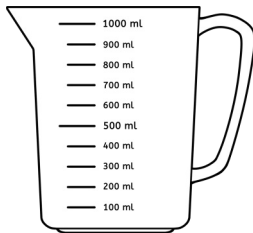


\_\_\_\_\_

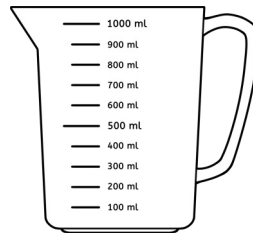
Zeichne ein!



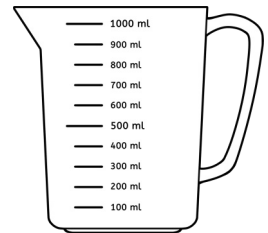
500 ml



300 ml



1 l



700 ml

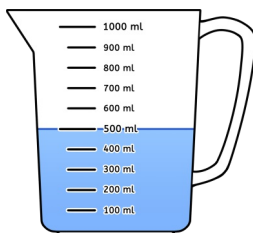


Wie viel Wasser fehlt noch? Zeichne ein und rechne!



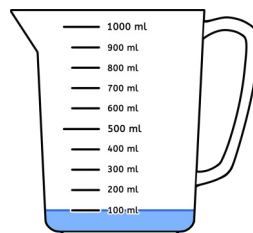
500 ml

\_\_\_\_\_



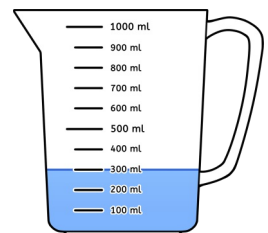
800 ml

\_\_\_\_\_



700 ml

\_\_\_\_\_



1 l

\_\_\_\_\_



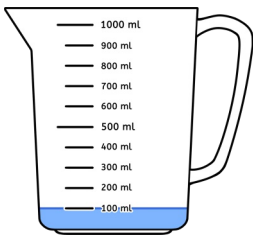
Name: \_\_\_\_\_

Datum: \_\_\_\_\_

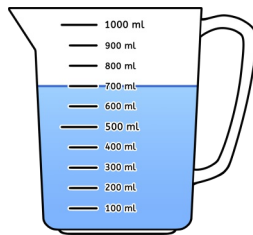
Klasse: \_\_\_\_\_

# Flüssigkeitsmengen - Lösungen


Wie viel Wasser ist im Messbecher? Lies richtig ab!



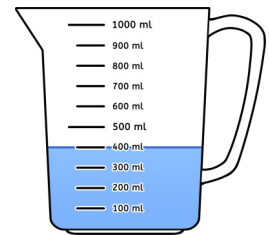
100 ml



700 ml

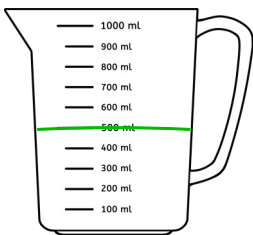


800 ml

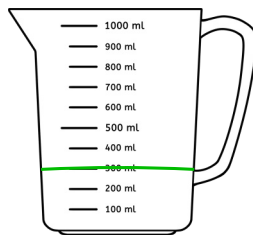


400 ml

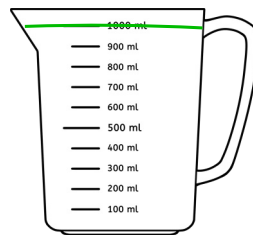
Zeichne ein!



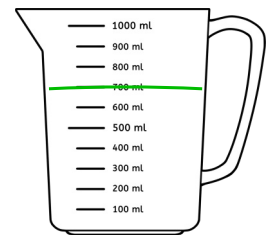
500 ml



300 ml



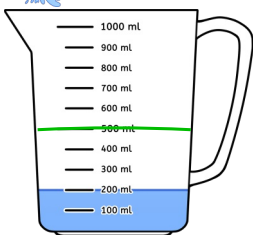
1 l



700 ml

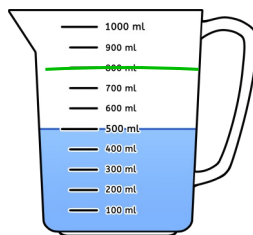


Wie viel Wasser fehlt noch? Zeichne ein und rechne!



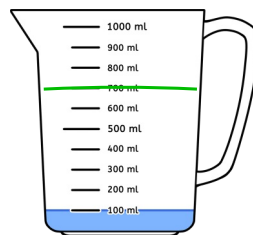
500 ml

300 ml



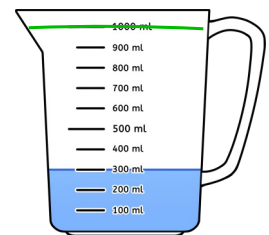
800 ml

300 ml



700 ml

600 ml



1 l

700 ml