






























Welche Zahlen sind hier versteckt?

1	2		4	5	6	7	8	9	
11	12	13	14	15	16	17	18	19	20
21	22	23	24	25	26	27	28		30
31	32	33	34	35	36	37	38		40
	42	43	44	45		47		49	50
51		53			56	57	58		60
61	62	63	64	65	66	67	68	69	70
71	72	73	74	75	76	77		79	80
81		83		85	86		88	89	90
91	92	93	94	95	96	97	98	99	100

	<input type="text"/>		<input type="text"/>		<input type="text"/>		<input type="text"/>		<input type="text"/>
	<input type="text"/>		<input type="text"/>		<input type="text"/>		<input type="text"/>		<input type="text"/>
	<input type="text"/>		<input type="text"/>		<input type="text"/>		<input type="text"/>		<input type="text"/>