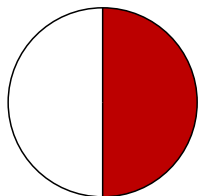


## Bruchrechnen mit Wind und Regen

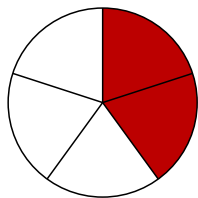

Kreise die Menge ein, die du bekommst und schreibe den Anteil auf.

Du bekommst:

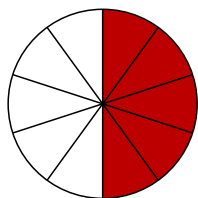


1 von 2  
Regenschirmen:

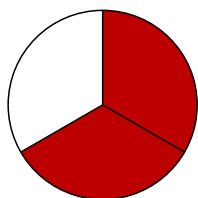
$\frac{1}{2}$



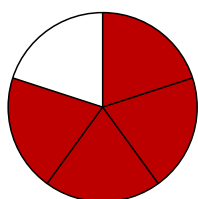

2 von 5  
Kürbissen:



5 von 10  
Blättern:



2 von 3  
Kastanien:



4 von 5  
Schals:

